

2705/302
2709/302
2710/302
STRUCTURES III
Oct. / Nov. 2017
Time: 3 hours



THE KENYA NATIONAL EXAMINATIONS COUNCIL

DIPLOMA IN BUILDING TECHNOLOGY
DIPLOMA IN ARCHITECTURE

MODULE III

STRUCTURES III

3 hours

INSTRUCTIONS TO CANDIDATES

You should have the following for this examination:

answer booklet;

scientific calculator.

This paper consists of EIGHT questions.

Answer any FIVE questions in the answer booklet provided.

All questions carry equal marks.

Maximum marks for each part of a question are indicated.

Relevant design tables are attached.

Candidates should answer the questions in English.

This paper consists of 8 printed pages.

Candidates should check the question paper to ascertain that all the pages are printed as indicated and that no questions are missing.

1. A simply supported beam is loaded with unfactored dead loads as shown in figure 1.

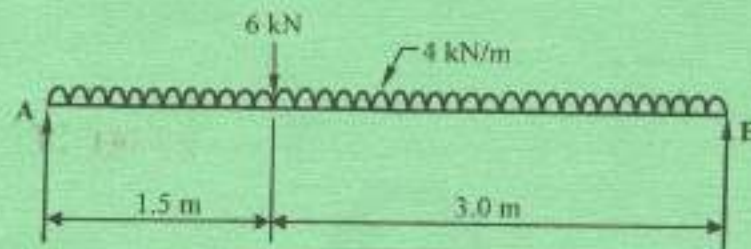


Fig. 1

Assuming that the beam is fully laterally restrained, select a suitable universal beam section in grade 5275 steel (grade 43) to satisfy bending, shear and deflection.

$E = 205 \text{ kN/mm}^2$

(20 marks)

2. A simply supported timber beam of effective span 2.4 carries a uniformly distributed load of 2 kN/m inclusive of self weight and a concentrated load of 2 kN at mid-span. The ends of the beam are held in position. Select a suitable rectangular section for the beam using timber of strength class C_{16} (SC 3). Check for bending, shear, deflection and lateral buckling. Assume all modification factors are equal to 1.0.

(20 marks)

3. Using the three moments theorem, analyse the beam shown in figure 2 and sketch the bending moment and shear force diagrams, indicating the values at all critical points.

(20 marks)

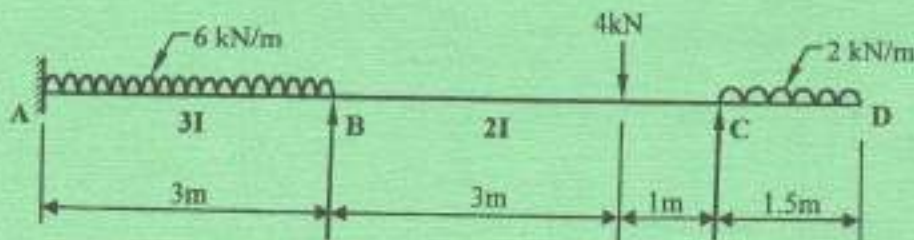


Fig. 2

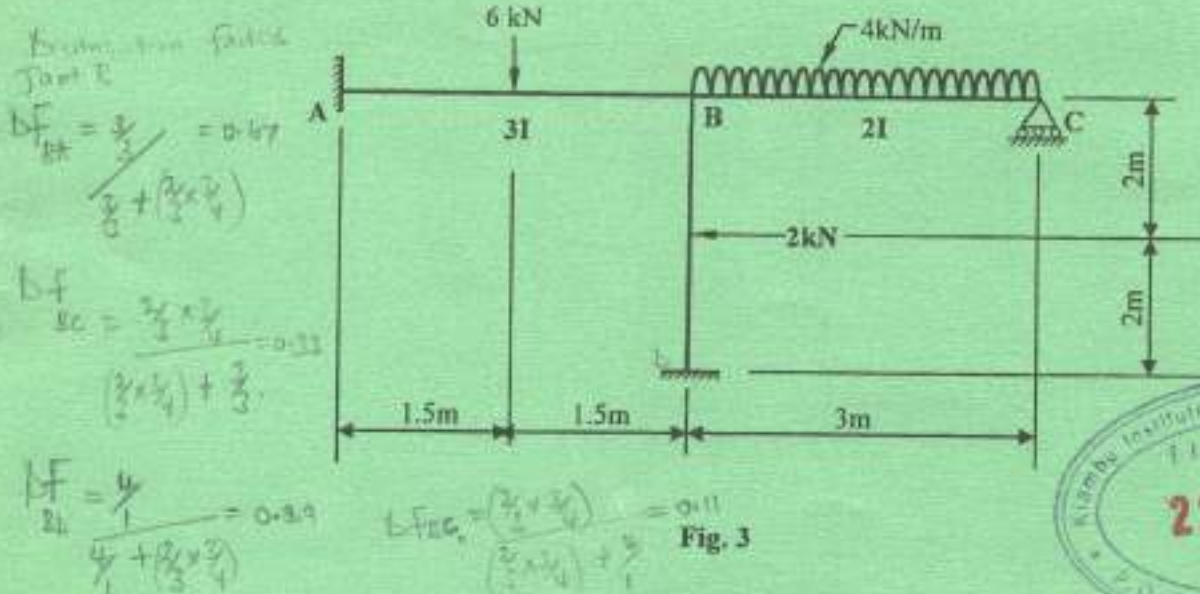
$\frac{6 \times 3^2}{2} =$

$\frac{2 \times 1.5^2}{2}$

$M_{max} = \int x dx$

Load force =

4. Using the moment distribution method, analyse the frame shown in figure 3 and hence sketch the bending moment diagram, indicating the values at all critical points. (20 marks)



5. Figure 4 shows a simply supported beam.

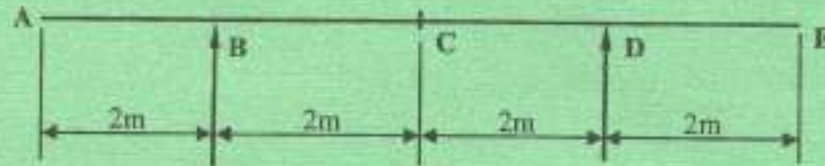


Fig. 4

Using equilibrium conditions, sketch the influence line diagrams for the following load components:

- reaction at point D;
- shear at point C;
- bending moment at point C.

Plot the values at every 1 m interval.

Point	A	B	C	D	E
Member	AB	BC	CD	DE	
DF	1	0.67	0.33	0.11	0.29
F.C.M	+2.25	2.25	-2	3	-
Shear	-2.25	2.25	-2	2	-
C.O	0.25	0.50	0.25	-0.50	-0.75
B	0.25	0.75	0.24	-0.014	0.81
TOTAL	-2	3.53	-3.6	2.7	-2.7

6. A cased 254 x 254 x 107 universal column of grade 5275 (grade 43) steel had an effective length of 3.6 m and supports factored loads as shown in figure 5.

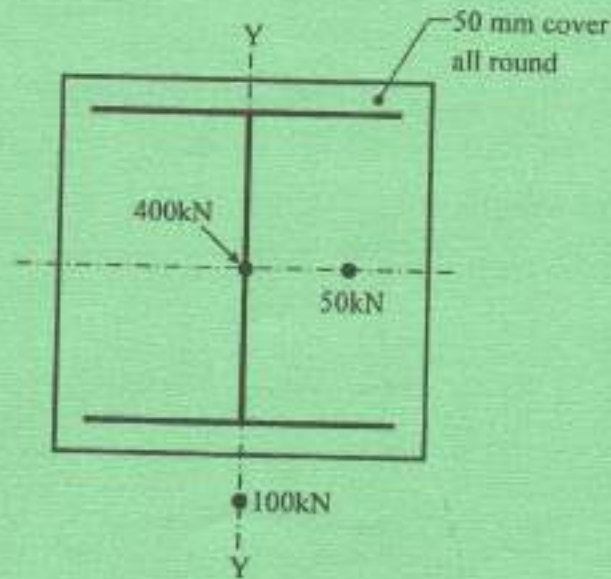


Fig. 5

Check the adequacy of the cased section.

$$f_{cu} = 25 \text{ N/mm}^2; P_c = 212 \text{ N/mm}^2$$

(20 marks)

7. Figure 6 shows a loaded timber truss.

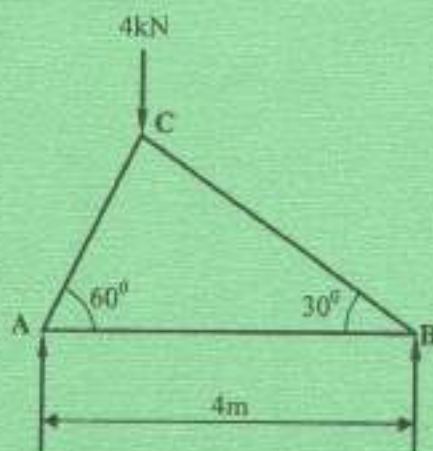


Fig. 6

Assuming that all members are pin-jointed, design members AB and AC using rectangular timber sections of strength class C_{16} (SC 3).

$$\text{permissible tensile stress} = 2.56 \text{ N/mm}^2$$

$$\text{permissible compressive stress} = 4.08 \text{ N/mm}^2$$

(20 marks)

8. Using the moment distribution method, analyse the frame shown in figure 7 and hence sketch the bending moment diagram, indicating the values at all critical points. Make six distributions. (20 marks)

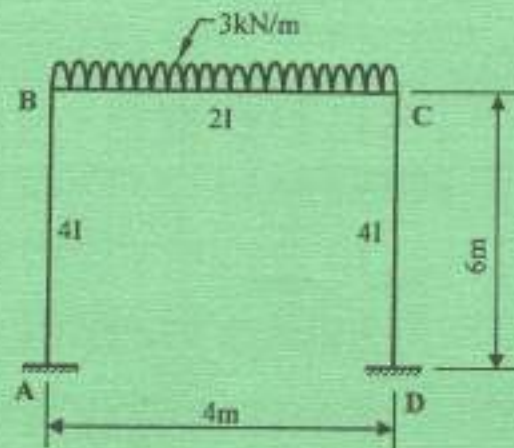


Fig. 7

F/L

UNIVERSAL COLUMNS

BS 4060-1: 2000
BS 4-1: 2006



Dimensions

Properties

Section Designation	Mass per Metre	Depth of Section	Width of Section	Thickness					Root Radius	Depth between Flange	Radius for Local Bending		Second Moment of Area		Radius of Gyration		Elastic Modulus		Plastic Modulus		Buckling Parameter	Torsional Index	Warping Constant	Area of Section
				Web	Flange	s	t	Y			r	Flange	Web	Axis x-x	Axis y-y	Axis x-x	Axis y-y	Axis x-x	Axis y-y	Axis x-x				
356x406x84	833.8	474.8	424	47.6	77	15.2	290.2	2.75	8.1	275000	59100	11	11600	4800	7110	0.843	5.46	28.8	608					
356x406x51	511	453.8	416.3	42.1	67.5	15.2	290.2	3.1	6.82	227000	82700	10.9	9560	3650	6560	0.841	6.05	31.1	702					
356x406x48	467	436.8	412.2	35.6	58	15.2	290.2	3.55	8.11	193000	97300	10.7	8380	3290	5030	0.838	6.88	34.3	585					
356x406x33	319	418	407	30.6	49.2	15.2	290.2	4.14	9.48	147000	53400	10.5	7000	2720	4150	0.837	7.66	38.5	501					
356x406x340	339.9	426.4	403	35.8	43.5	15.2	290.2	4.7	10.8	133600	46400	10.4	6030	2330	3040	0.836	8.85	43.5	433					
356x406x287	287.1	393.8	388	22.6	36.5	15.2	280.2	5.47	12.8	90400	38700	10.3	5070	1940	2050	0.835	10.2	48.3	368					
356x406x235	235.1	381	384.8	18.4	30.2	15.2	280.2	6.54	15.8	79100	31000	10.2	4180	1670	2380	0.834	12.1	55.4	288					
356x406x202	201.8	374.8	374.7	16.5	27	15.2	280.2	8.34	17.8	66300	23700	9.8	3540	1280	3070	0.844	13.4	61.6	257					
356x406x177	177	368.2	372.6	14.4	23.8	15.2	280.2	7.83	20.2	57100	20500	15.9	3100	1100	3460	0.844	15	68.0	226					
356x406x153	152.9	362	370.5	12.3	20.7	15.2	280.2	8.25	23.6	48600	17600	16.8	2680	948	3980	0.844	17	75.1	195					
356x368x128	128	345.6	368.6	10.4	17.8	15.2	280.2	10.5	27.9	40200	14850	15.8	2280	782	2480	0.844	18.9	81.8	164					
305x305x283	282.8	388.3	322.2	35.8	44.1	15.2	246.7	3.85	9.21	78800	24600	14.8	4320	1530	5150	0.855	7.85	32.5	300					
305x305x240	240	352.5	318.4	32	37.7	15.2	246.7	4.22	10.7	64200	20300	14.5	3640	1330	4280	0.854	8.74	35.5	268					
305x305x198	198.1	338.8	314.8	16.1	31.4	15.2	246.7	5.01	13.8	50000	16300	14.3	3000	1040	3440	0.854	10.2	38.8	252					
305x305x158	158.1	327.1	311.2	15.8	29	15.2	246.7	6.22	16.6	38700	12600	13.8	2570	808	2580	0.851	12.5	43.7	201					
305x305x137	136.8	320.8	309.2	13.8	21.7	15.2	246.7	7.12	17.8	32800	10700	13.7	2090	692	2300	0.851	14.2	48.2	174					
305x305x118	117.9	314.8	307.4	12	18.7	15.2	246.7	8.22	20.8	27700	8850	13.4	1760	583	1860	0.85	16.2	53.6	150					
305x305x87	86.9	307.6	305.3	8.9	15.4	15.2	246.7	9.91	24.6	22200	7310	13.4	1450	479	1590	0.85	19.3	61.6	123					
254x254x187	187.1	298.1	285.2	19.2	31.7	12.7	200.3	4.18	10.4	30000	8670	11.8	2980	744	2420	0.851	8.48	16.3	213					
254x254x152	152	276.3	281.3	18.3	28.2	12.7	200.3	5.16	13.1	22000	7130	11.4	1880	576	1870	0.85	10.3	17.9	160					
254x254x107	107.1	268.7	258.8	13.8	20.5	12.7	200.3	6.31	15.8	17500	5930	11.3	1310	458	1480	0.848	12.4	20.8	136					
254x254x89	88.9	260.3	256.3	10.3	17.5	12.7	200.3	7.41	18.4	14200	4660	11.2	1100	379	1220	0.85	14.3	23.1	113					
254x254x73	73.1	254.1	254.8	8.6	14.2	12.7	200.3	8.96	23.2	11400	3510	11.1	890	307	992	0.849	17.3	28.2	83.1					
203x203x86	86.1	222.2	208.1	12.7	20.8	10.2	160.8	5.1	12.7	9450	3130	8.28	600	266	877	0.85	10.2	13.18	110					
203x203x71	71	215.8	206.4	10	17.3	10.2	160.8	6.87	16.1	7620	2540	8.15	510	248	798	0.853	11.5	15.2	84.4					
203x203x60	60	209.8	205.8	9.4	14.2	10.2	160.8	7.25	17.1	6120	2060	8.06	384	201	650	0.848	14.1	18.7	75.4					
203x203x52	52	206.2	204.3	7.9	12.5	10.2	160.8	8.17	20.4	5280	1780	8.91	310	174	567	0.848	15.8	20.7	66.3					
203x203x46	46.1	203.2	203.6	7.2	11	10.2	160.8	9.25	23.2	4570	1550	8.82	250	152	487	0.847	17.7	24.3	58.7					
152x152x237	237	183.8	154.4	8	11.8	7.8	123.6	6.71	18.8	2710	706	6.85	270	81.5	308	0.848	13.3	16.4	42.1					
152x152x20	20	167.8	152.8	6.5	8.4	7.8	123.6	8.13	19	1750	560	6.78	222	73.3	248	0.848	16	18.3	38.3					
152x152x23	23	152.4	152.2	5.8	6.8	7.8	123.6	11.2	21.3	1260	400	6.54	164	52.5	182	0.84	20.7	23.2	29.2					

Grade stresses and moduli of elasticity for various strength classes: for service classes 1 and 2

Strength class	Bending parallel to grain N/mm ²	Tension parallel to grain N/mm ²	Compression parallel to grain N/mm ²	Compression perpendicular to grain ^a N/mm ²	Shear parallel to grain N/mm ²	Modulus of elasticity		Characteristic density, ρ _k ^b kg/m ³	Average density, ρ _{ave} ^b kg/m ³	
						Mean N/mm ²	Minimum N/mm ²			
C14	4.1	2.5	5.2	2.1	1.6	0.60	6 800	4 600	290	350
C16	5.3	3.2	5.8	2.2	1.7	0.67	8 800	5 800	310	370
C18	5.8	3.5	7.1	2.2	1.7	0.67	9 100	6 000	320	380
C22	6.8	4.1	7.5	2.3	1.7	0.71	9 700	6 500	340	410
C24	7.5	4.5	7.9	2.4	1.9	0.71	10 800	7 200	350	420

NOTE: Strength classes C14 to C40 are for softwoods and D30 to D70 are for hardwoods

^a When the specification specifically prohibits warping at bearing areas, the higher values of compression perpendicular to grain stress may be used, otherwise the lower values apply.

^b The values of characteristic density given above are for use when designing joints. For the calculation of dead load, the average density should be used.

Maximum depth to breadth ratios (solid and laminated members)

Degree of lateral support	Maximum depth to breadth ratio
No lateral support	2
Ends held in position	3
Ends held in position and member held in line as by purlins or tie rods at centres not more than 30 times breadth of the member	4
Ends held in position and compression edge held in line, as by direct connection of sheathing, deck or joists	5
Ends held in position and compression edge held in line, as by direct connection of sheathing, deck or joists, together with adequate bridging or blocking spaced at intervals not exceeding six times the depth	6
Ends held in position and both edges held firmly in line	7

Limiting width-to-thickness ratios for sections other than CHS and RHS

Compression element	Ratio ^a	Limiting value ^b		
		Class 1 plastic	Class 2 compact	Class 3 semi-compact
Outstand element of compression flange	Rolled section	9E	10E	15E
	Welded section	8E	9E	13E
	Compression due to bending	28E	32E	40E
Internal element of compression flange	Axial compression	Not applicable		
Web of an I-, H- or box section ^c	Neutral axis at mid-depth	80E	100E	120E
	Generally ^d	$\frac{80E}{1+r_1}$ but 40E	$\frac{100E}{1+r_1}$ but 40E	$\frac{120E}{1+2r_2}$ but 40E
	If r_1 is positive:			
	If r_1 is negative:			
Axial compression ^d	d/t	Not applicable		

^a Dimensions D, d, T and t are defined in Figure 5. For a box section h and T are flange dimensions and d and t are web dimensions, where the distinction between webs and flanges depends upon whether the box section is bent about its major axis or its minor axis, see 3.5.1
^b The parameter E = (275/p_y)²
^c For the web of a hybrid section E should be based on the design strength p_y of the flanges.
^d The stress ratios r₁ and r₂ are defined in 3.5.5.

THIS IS THE LAST PRINTED PAGE.